

activités mentales 7 page 140

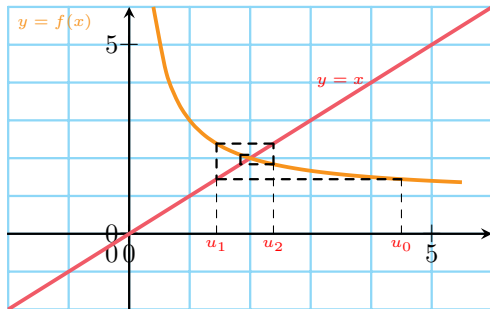
Sésamath

Maths 1S

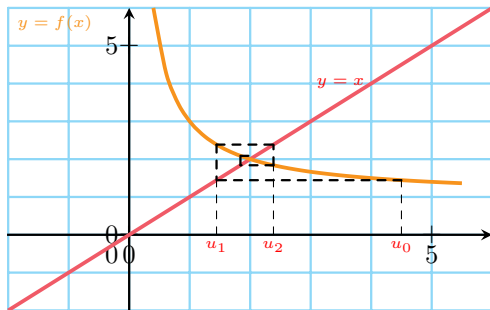


Dire si chacune des suites ci-dessous semble convergente ou divergente et conjecturer éventuellement sa limite.

1

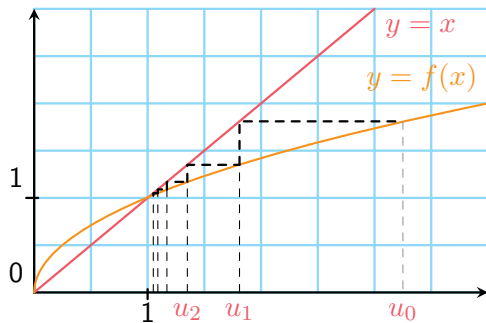


1

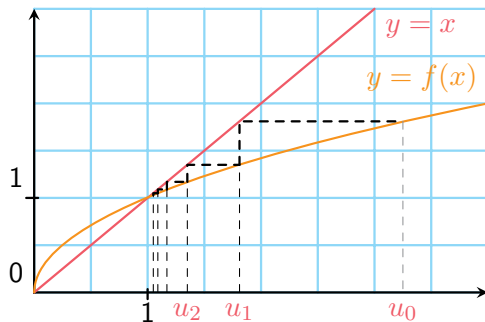


La suite semble convergente. Sa limite semble être 2.

2



2



La suite semble convergente. Sa limite semble être 1.